

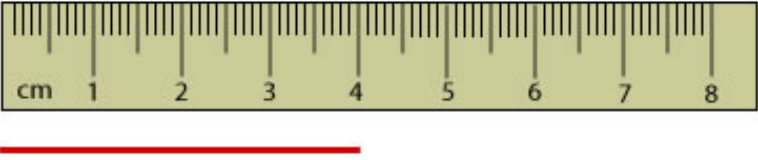
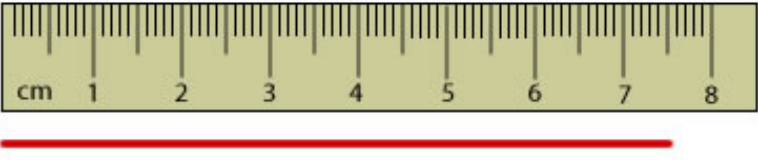
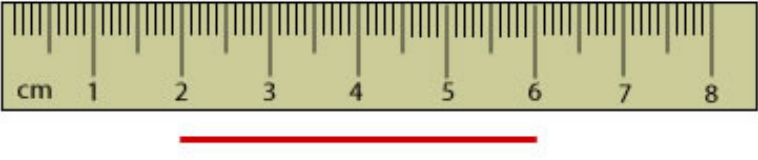
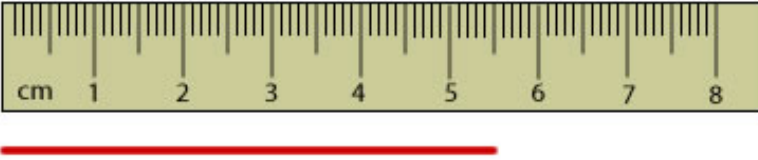
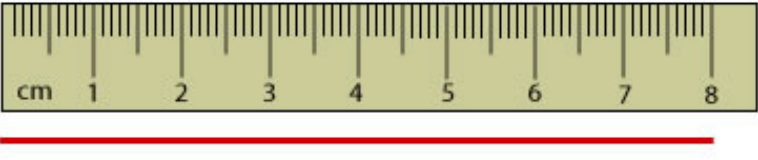


Using a Centimeters Ruler

Name: _____

Common Core: 2.MD.1






Instructions: About how long is each line?

Ruler	Is the line between two numbers?	Answer
	<p>Yes No</p> <p>If yes, which two: ___ & ___</p>	<p>_____ cm.</p>
	<p>Yes No</p> <p>If yes, which two: ___ & ___</p>	<p>_____ cm.</p>
	<p>Yes No</p> <p>If yes, which two: ___ & ___</p>	<p>_____ cm.</p>
	<p>Yes No</p> <p>If yes, which two: ___ & ___</p>	<p>_____ cm.</p>
	<p>Yes No</p> <p>If yes, which two: ___ & ___</p>	<p>_____ cm.</p>



Using a Centimeters Ruler
Common Core: 2.MD.1

Answers!

Ruler	Is the line between two numbers?	Answer
	<p>Yes <u>No</u></p> <p>If yes, which two: ___ & ___</p>	<p>4 cm.</p>
	<p><u>Yes</u> No</p> <p>If yes, which two: 7 & 8</p>	<p>7 1/2 cm.</p>
	<p>Yes <u>No</u></p> <p>If yes, which two: ___ & ___</p>	<p>4 cm.</p>
	<p><u>Yes</u> No</p> <p>If yes, which two: 5 & 6</p>	<p>5 1/2 cm.</p>
	<p>Yes <u>No</u></p> <p>If yes, which two: ___ & ___</p>	<p>8 cm.</p>