


Telling Time to the Quarter-Hour
Common Core: 2.MD.7

Name: _____




_____ P.M.

The time is a quarter past _____ P.M.



_____ P.M.

The time is a quarter till' _____ P.M.



_____ A.M.

The time is a quarter till' _____ A.M.



_____ P.M.

The time is a quarter past _____ P.M.



_____ A.M.

The time is a quarter past _____ A.M.



_____ A.M.

The time is a quarter past _____ A.M.


Telling Time to the Quarter-Hour
Common Core: 2.MD.7

Answers




6:15 P.M.

The time is a quarter
past 6 P.M.



10:45 P.M.

The time is a quarter
till' 11 P.M.



5:45 A.M.

The time is a quarter
till' 6 A.M.



7:15 P.M.

The time is a quarter
past 7 P.M.



3:15 A.M.

The time is a quarter
past 3 A.M.



12:45 A.M.

The time is a quarter
till' 1 A.M.