

MR. NUSSBAUM
LEARNING + FUN



1. Washington



2. Adams



3. Jefferson



4. Madison



5. Monroe



6. Quincy Adams



7. Jackson



8. Van Buren



9. Henry Harrison



10. Tyler



11. Polk



12. Taylor



13. Fillmore




14. Pierce



15. Buchanan



16. Lincoln



17. Johnson



18. Grant



19. Hayes



20. Garfield



21. Arthur



22. Cleveland



23. Harrison



24. Cleveland



25. McKinley



26. Roosevelt



27. Taft



28. Wilson



29. Harding



30. Coolidge



31. Hoover



32. Roosevelt



33. Truman



34. Eisenhower



35. Kennedy



36. Johnson



37. Nixon



38. Ford



39. Carter



40. Reagan



41. Bush




42. Clinton



43. W. Bush



44. Obama



45. Trump

Presidential Math


Name _____

Answer the math problems below. See the example

Example:



To find the answer, search the presidential showcase. You'll see that the first picture represents President Ulysses S. Grant and thus is 18, since he was the 18th president. The second picture shows President Zachary Taylor. Since he was the 12th president, the math problem is 18 + 12. Since the answer is 30, find the 30th president, which is Calvin Coolidge. Thus:



Answers:



+



= Fillmore



+



= Reagan



-



= Jackson



-



= Lincoln



+



= Trump