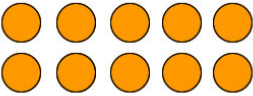
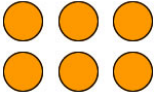


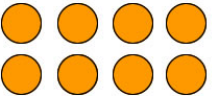




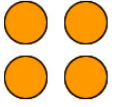


**Rectangular Arrays**

Name \_\_\_\_\_

**Common Core: 2.OA.4**

**Instructions:** Indicate the addition equation(s) illustrated in the rectangular arrays. The first is done for you.

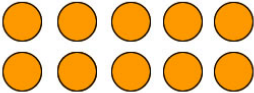
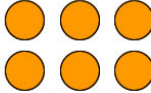


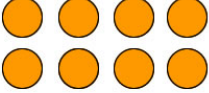



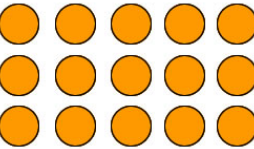
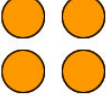
	$5 + 5$ or $2 + 2 + 2 + 2 + 2$		
			
			
			
			

Rectangular Arrays

Name \_\_\_\_\_

Common Core: 2.OA.4

**Answers!**

	$5 + 5$ or $2 + 2 + 2 + 2 + 2$		$3 + 3$ or $2 + 2 + 2$
	$3 + 3 + 3$		$5 + 5 + 5 + 5$ or $4 + 4 + 4 + 4 + 4$
	$4 + 4$ or $2 + 2 + 2 + 2$		$4 + 4 + 4 + 4$
	$5 + 5 + 5 + 5 + 5$		$3 + 3 + 3 + 3$ or $4 + 4 + 4$
	$5 + 5 + 5 + 5$ or $3 + 3 + 3 + 3 + 3$		$2 + 2$