




























**Grade 1 Adding Three Numbers as Pictures**

Name \_\_\_\_\_

Directions: Answer the adding question.

 <p style="text-align: center;">+</p>  <p style="text-align: center;">+</p>  <p style="text-align: right;"><b>How many lobsters?</b></p>	 <p style="text-align: center;">+</p>  <p style="text-align: center;">+</p>  <p style="text-align: right;"><b>How many apples?</b></p>	 <p style="text-align: center;">+</p>  <p style="text-align: center;">+</p>  <p style="text-align: right;"><b>How many horses?</b></p>
<p>_____</p>	<p>_____</p>	<p>_____</p>
 <p style="text-align: center;">+</p>  <p style="text-align: center;">+</p>  <p style="text-align: right;"><b>How many diamonds?</b></p>	 <p style="text-align: center;">+</p>  <p style="text-align: center;">+</p>  <p style="text-align: right;"><b>How many carrots?</b></p>	 <p style="text-align: center;">+</p>  <p style="text-align: center;">+</p>  <p style="text-align: right;"><b>How many lobsters?</b></p>
<p>_____</p>	<p>_____</p>	<p>_____</p>
 <p style="text-align: center;">+</p>  <p style="text-align: center;">+</p>  <p style="text-align: right;"><b>How many diamonds?</b></p>	 <p style="text-align: center;">+</p>  <p style="text-align: center;">+</p>  <p style="text-align: right;"><b>How many apples?</b></p>	 <p style="text-align: center;">+</p>  <p style="text-align: center;">+</p>  <p style="text-align: right;"><b>How many horses?</b></p>
<p>_____</p>	<p>_____</p>	<p>_____</p>