



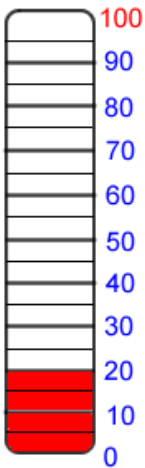
Measurement

Name: _____

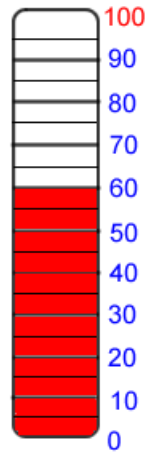
Common Core: 2.MD.1

Instructions: Indicate the temperature in each of the locations.

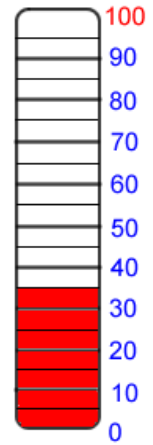
The thermometer reads:



In Green Bay, Wisconsin



In Oakland, California

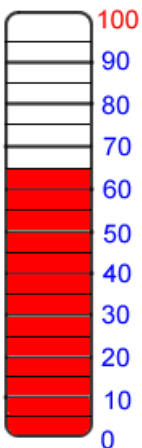


In Annapolis, Maryland

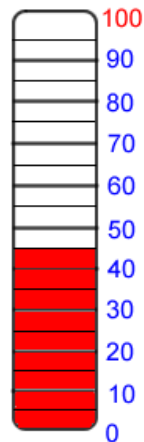
Answer:

Answer:

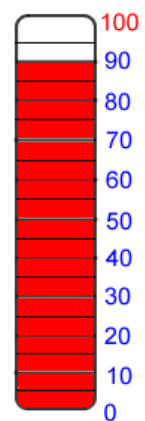
Answer:



In Atlanta, Georgia



In Sterling, Virginia



In Tucson, Arizona

Answer:

Answer:

Answer:



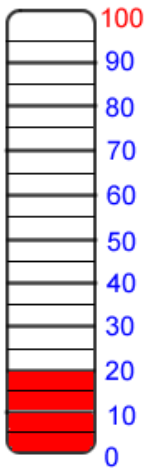
Measurement

Name: _____

Common Core: 2.MD.1

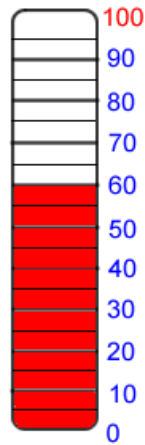
Answers

The thermometer reads:



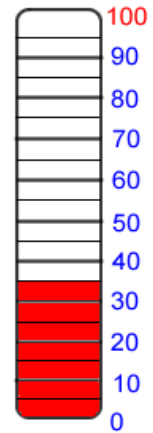
In Green Bay, Wisconsin

Answer: 20 degrees



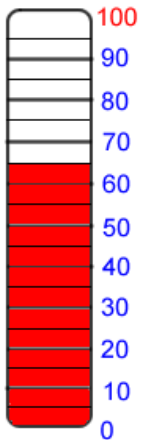
In Oakland, California

Answer: 60 degrees



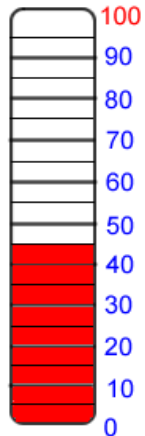
In Annapolis, Maryland

Answer: 35 degrees



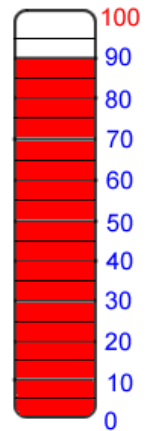
In Atlanta, Georgia

Answer: 65 degrees



In Sterling, Virginia

Answer: 45 degrees



In Tucson, Arizona

Answer: 90 degrees