

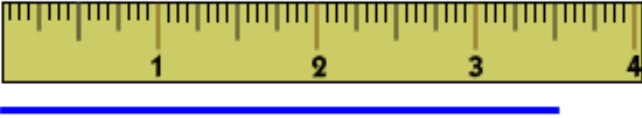

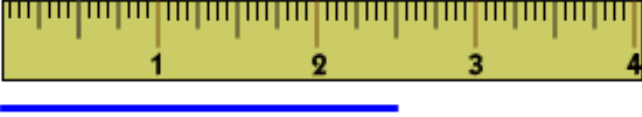
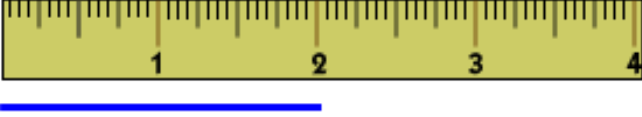



Using a Ruler

Name: _____

Common Core: 2.MD.1

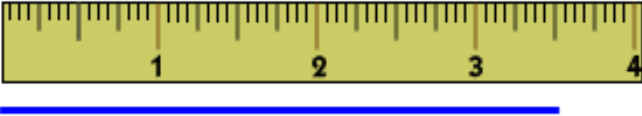

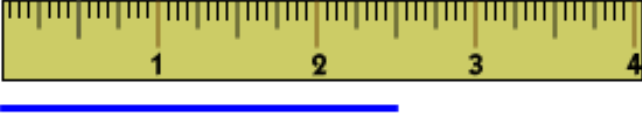
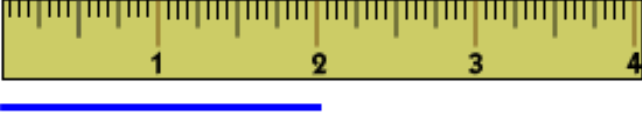

Instructions: About how long is each line?

Ruler	Is the line between two numbers?	Answer
	Yes No If yes, which two: ___ & ___	_____ in.
	Yes No If yes, which two: ___ & ___	_____ in.
	Yes No If yes, which two: ___ & ___	_____ in.
	Yes No If yes, which two: ___ & ___	_____ in.
	Yes No If yes, which two: ___ & ___	_____ in.



Using a Ruler
Common Core: 2.MD.1
Answers

Name: _____

Ruler	Is the line between two numbers?	Answer
	<p><u>Yes</u> No</p> <p>If yes, which two: 3 & 4</p>	<p>3 1/2 in.</p>
	<p><u>Yes</u> No</p> <p>If yes, which two: 0 & 1</p>	<p>1/2 in.</p>
	<p><u>Yes</u> No</p> <p>If yes, which two: 2 & 3</p>	<p>2 1/2 in.</p>
	<p><u>Yes</u> <u>No</u></p> <p>If yes, which two: ___ & ___</p>	<p>2 in.</p>
	<p><u>Yes</u> No</p> <p>If yes, which two: 1 & 2</p>	<p>1 1/2 in.</p>