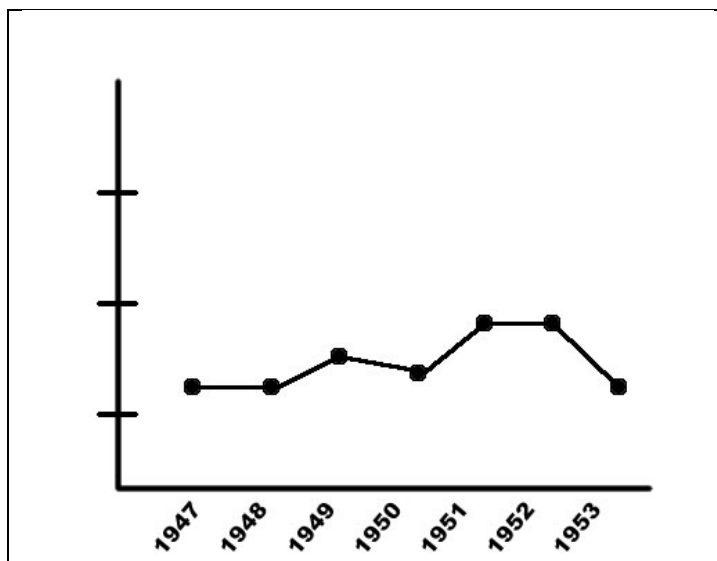


Jackie Robinson Baseball Card Histogramatics (Reading Graphs)

Name: _____

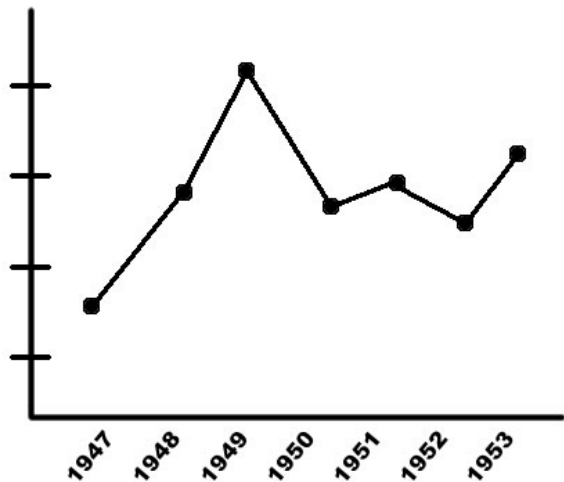
Below are Jackie Robinson's career statistics. The table below shows how many home runs, runs batted in, hits, doubles, triples, runs scored, walks, and strikeouts he had for each year of his career. It also shows his batting average, which can be interpreted as the number of times per 1,000 at bats that Jackie Robinson would get a hit. For example, in 1947, his batting average was .297. This means he would get 297 hits per 1,000 at bats, or, 29.7 hits per 100 at bats.

Jackie Robinson									
	Home Runs	Runs Batted In	Hits	Doubles	Triples	Runs Scored	Walks	Strikeouts	Batting Average
1947	12	48	175	31	5	125	74	36	.297
1948	12	85	170	38	8	108	57	37	.296
1949	16	124	203	38	12	122	86	27	.342
1950	14	81	170	39	4	99	80	24	.328
1951	19	88	185	33	7	106	79	27	.338
1952	19	75	157	17	3	104	106	40	.308
1953	12	95	159	34	7	109	74	30	.329
1954	15	59	120	22	4	62	59	20	.311
1955	8	36	81	6	2	51	61	18	.256
1956	10	43	98	15	2	61	60	32	.275



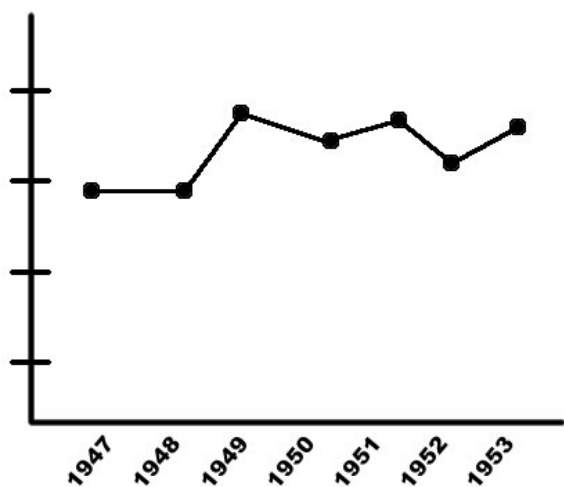
Look at the graph to the left and the chart above. What statistic is graphed?

A. Home Runs
 B. Runs Batted in
 C. Doubles
 D. Triples



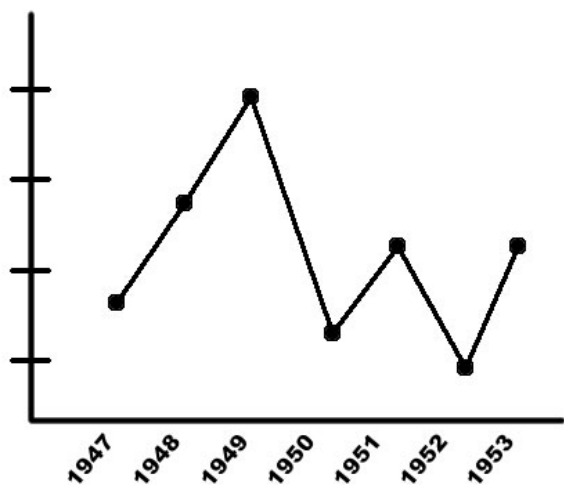
Look at the graph to the left and the chart on the previous page. What statistic is graphed?

- A. Triples
- B. Runs Scored
- C. Runs Batted In
- D. Walks



Look at the graph to the left and the chart on the previous page. What statistic is graphed?

- A. Triples
- B. Doubles
- C. Runs Scored
- D. Batting Average



Look at the graph to the left and the chart on the previous page. What statistic is graphed?

- A. Triples
- B. Doubles
- C. Runs Scored
- D. Walks