










Athletes and their Numbers

Name _____

Famous athletes in football, baseball, and basketball, often make their numbers iconic. How well do you know famous athletes and their numbers? Label the jerseys below with the correct athlete. Complete the math problems on the next page to find out which jersey belongs to which player.

Math Problems

$$\begin{array}{r} 31 \\ - 19 \\ \hline \end{array}$$

Tom Brady

$$\begin{array}{r} 56 \\ + 28 \\ \hline \end{array}$$

Antonio Brown

$$\begin{array}{r} 16 \\ + 14 \\ \hline \end{array}$$

Stephen Curry

$$\begin{array}{r} 72 \\ - 39 \\ \hline \end{array}$$

Larry Bird

$$\begin{array}{r} 71 \\ - 29 \\ \hline \end{array}$$

Jackie Robinson

$$\begin{array}{r} 60 \\ - 42 \\ \hline \end{array}$$

Peyton Manning

$$\begin{array}{r} 51 \\ - 28 \\ \hline \end{array}$$

Michael Jordan

$$\begin{array}{r} 51 \\ - 48 \\ \hline \end{array}$$

Babe Ruth

$$\begin{array}{r} 18 \\ + 6 \\ \hline \end{array}$$

Willie Mays